

# Home Learning

Year 1

Monday 4th December 2023

Complete the following activities in your home learning book.

## Reading

Read the following text about the Queen's Elephant and then answer the questions below.


## The Queen's Elephant

People say that The Queen has a big elephant in her garden. The elephant sleeps in the shed and eats cream buns. She has never been seen outside of the garden but lots of people think that it is true.

I think that The Queen likes to ride her elephant at night.

One day, the elephant broke a statue of The King and ate all of the cakes that the cook had made. "That elephant must go!" said The King.

I think that she is still there!



# Home Learning

Year 1

Monday 4th December 2023

1. Where does the elephant sleep?

---

2. Why do you think that The King said '**That elephant must go!**'

---

3. Find and copy one adjective used to describe the elephant.

---

4. What do you think might happen next to The Queen's elephant?

---

---

---

# Home Learning

Year 1

Monday 4th December 2023

## Phonics

Read the following text and complete the phoneme spotter for all the split digraphs.

Dear June,

I am having a really fun holiday in Athens! The huge hotel we are staying in has a pool with a flume! When I'm not in the pool, I like to race my brother to the beach and eat ice cream cones in the shade.



In the evening, we sit by the docks and play games. The food here is yummy. Yesterday, I had chocolate cake and apple pie for pudding!



Tomorrow, we are going on a blue boat to a place called Crete. I hope we will see a stone tower.

I can't wait to see you when I get home.

Kate xxx

Find and sort the words with split digraphs.

'a-e'	'e-e'	'i-e'	'o-e'	'u-e'

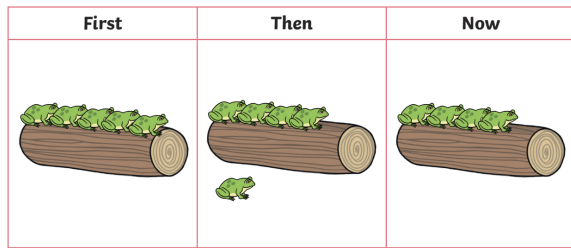
# Home Learning

Year 1

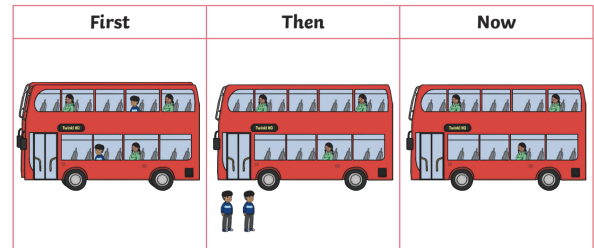
Monday 4th December 2023

## Maths


Use the First, Then, Now story to complete the subtraction number sentences.



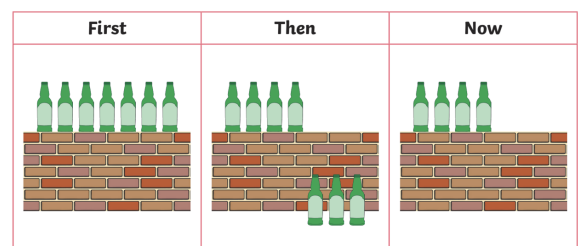
$$\square - \square = \square$$



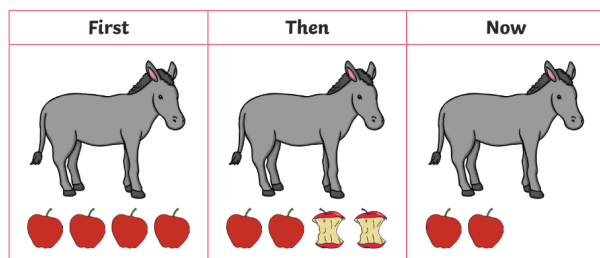
$$\square - \square = \square$$



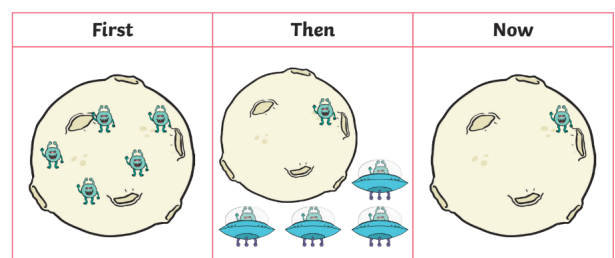
$$\square - \square = \square$$



$$\square - \square = \square$$



$$\square - \square = \square$$



$$\square - \square = \square$$

**Challenge:** Can you write the commutative number sentence? (Remember the biggest number goes first when subtracting.)







## Science

# Home Learning

**Year 1**

**Monday 4th December 2023**

Look at the materials below. What do you think they feel like? What do they look like? What sound would they make if you hit them? Describe each material in the box on the right, then think about what objects you know of that are made of each material.

Material	Describe the Material	What objects are made of this material?
 wood	<hr/> <hr/> <hr/>	<hr/> <hr/> <hr/>
 metal	<hr/> <hr/> <hr/>	<hr/> <hr/> <hr/>
 stone	<hr/> <hr/> <hr/>	<hr/> <hr/> <hr/>
 glass	<hr/> <hr/> <hr/>	<hr/> <hr/> <hr/>
 plastic	<hr/> <hr/> <hr/>	<hr/> <hr/> <hr/>
 rubber	<hr/> <hr/> <hr/>	<hr/> <hr/> <hr/>